

Name : _____

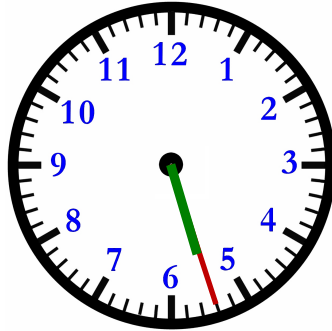
Score : _____

Teacher : _____

Date : _____



Clock A



Clock B

What time is on Clock A ? _____

What time is on Clock B ? _____

How much time has elapsed between Clock A and B ? _____



Clock A



Clock B

What time is on Clock A ? _____

What time is on Clock B ? _____

How much time has elapsed between Clock A and B ? _____



Clock A

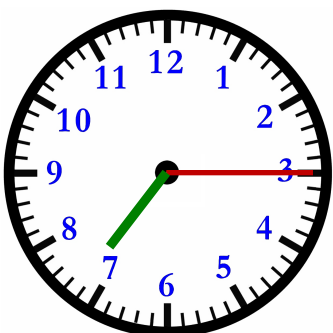


Clock B

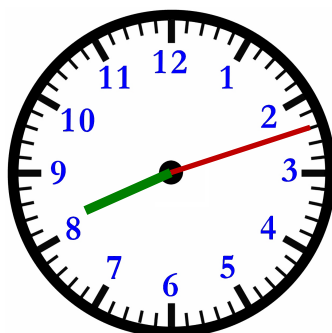
What time is on Clock A ? _____

What time is on Clock B ? _____

How much time has elapsed between Clock A and B ? _____



Clock A



Clock B

What time is on Clock A ? _____

What time is on Clock B ? _____

How much time has elapsed between Clock A and B ? _____



Name : _____

Score : _____

Teacher : _____

Date : _____



Clock A

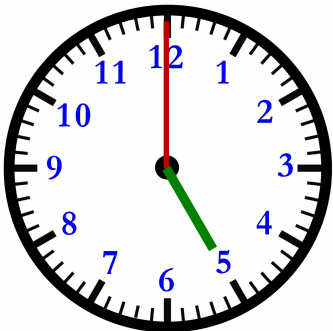


Clock B

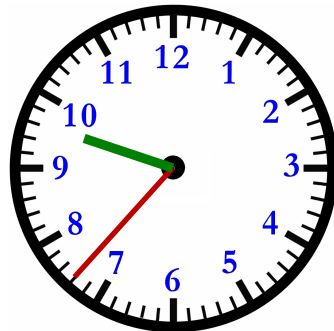
What time is on Clock A ? 1:25

What time is on Clock B ? 5:27

How much time has elapsed between Clock A and B ? 4 hrs and 2 mins



Clock A

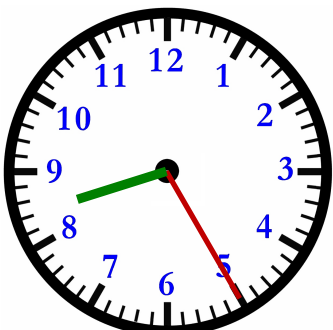


Clock B

What time is on Clock A ? 5:00

What time is on Clock B ? 9:37

How much time has elapsed between Clock A and B ? 4 hrs and 37 mins



Clock A

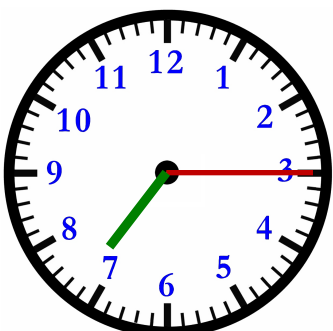


Clock B

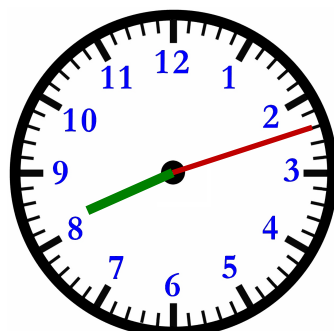
What time is on Clock A ? 8:25

What time is on Clock B ? 10:49

How much time has elapsed between Clock A and B ? 2 hrs and 24 mins



Clock A



Clock B

What time is on Clock A ? 7:15

What time is on Clock B ? 8:12

How much time has elapsed between Clock A and B ? 0 hrs and 57 mins

